

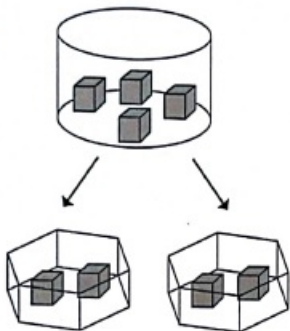


TOLAK BERTURUT-TURUT

Aktiviti 1

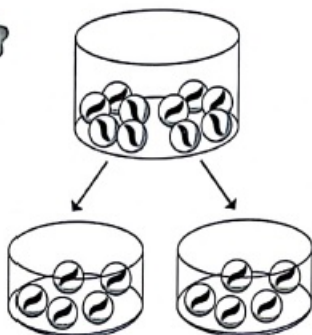
Lengkapkan.

a



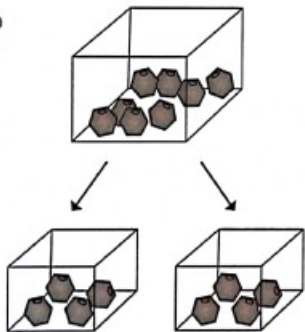
$$4 - 2 - 2 = \boxed{0}$$

b



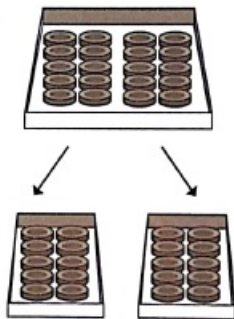
$$10 - 5 - 5 = \boxed{}$$

c



$$8 - \boxed{} - \boxed{} = \boxed{}$$

d

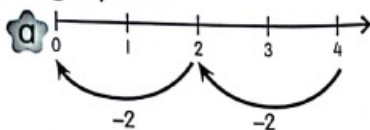


$$20 - \boxed{} - \boxed{} = \boxed{}$$

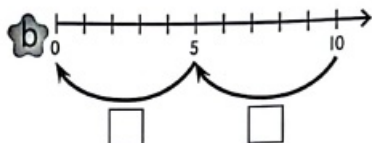


Aktiviti 2

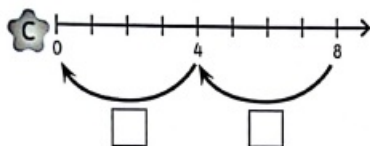
1 Lengkapkan.



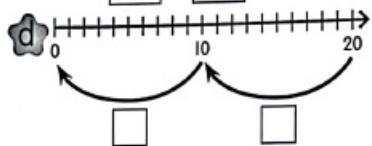
$$4 - 2 - \boxed{2} = 0$$



$$10 - \boxed{} - \boxed{} = 0$$



$$\boxed{} - \boxed{} - \boxed{} = 0$$



$$\boxed{} - \boxed{} - \boxed{} = 0$$

2 Lengkapkan ayat matematik.

- a Ain ada 8 kotak air laici. Dia beri 4 kotak kepada Chai. Baki 4 kotak lagi diberi kepada Raj.

$$8 - \boxed{} - \boxed{} = 0$$

- b Terdapat 15 kuih di dalam bekas. 5 kuih diisi dalam piring. 5 kuih lagi diberi kepada jiran dan selebihnya dibungkus.

$$15 - \boxed{} - \boxed{} - \boxed{} = 0$$

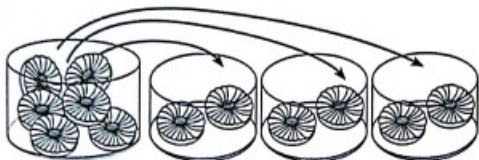
- c Ada 40 buah kerusi. 10 kerusi dijual pada hari Isnin. 10 kerusi lagi dijual pada hari Selasa. Hari Rabu pula 10 kerusi telah dijual. Selebihnya dijual pada hari Khamis.

$$\boxed{} - \boxed{} - \boxed{} - \boxed{} - \boxed{} = 0$$



Lengkapkan ayat matematik.

a



Biskut dikeluarkan dua-dua.

$$6 - \square - \square - \square = \square$$

$$\begin{array}{r} 6 \\ - 2 \\ \hline \square \\ - \square \\ \hline \square \\ - \square \\ \hline 0 \end{array}$$

b



Ada 12 roti. Asingkan empat-empat.

$$12 - \square - \square - \square = \square$$

$$\begin{array}{r} 12 \\ - \square \\ \hline \square \\ - \square \\ \hline \square \\ - \square \\ \hline 0 \end{array}$$

c

Ada 30 ulas nangka. Nangka dibungkus sepuluh-sepuluh.

$$\square - \square - \square - \square = \square$$

$$\begin{array}{r} \square \\ - \square \\ \hline \square \\ - \square \\ \hline \square \\ - \square \\ \hline 0 \end{array}$$